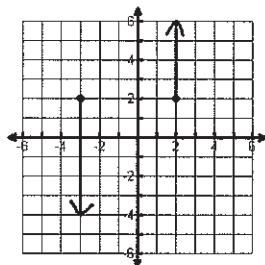


Domain and Range Worksheet #1

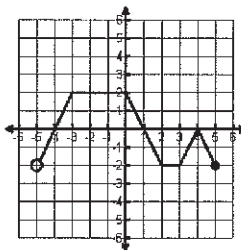
Name: _____

State the domain and range for each graph and then tell if the graph is a function (write yes or no).

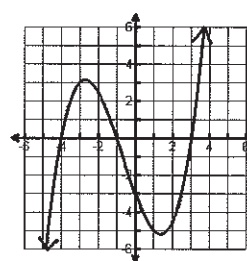
- 1) Domain _____
Range _____
Function? _____



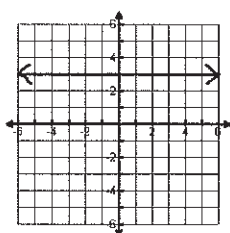
- 2) Domain _____
Range _____
Function? _____



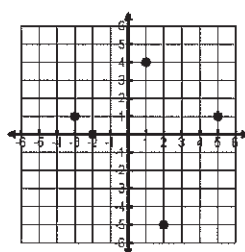
- 3) Domain _____
Range _____
Function? _____



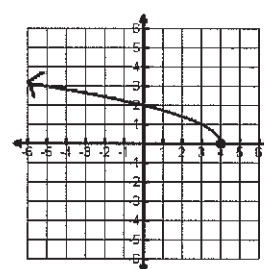
- 4) Domain _____
Range _____
Function? _____



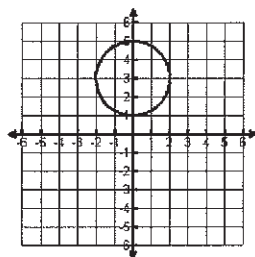
- 5) Domain _____
Range _____
Function? _____



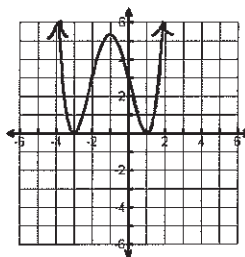
- 6) Domain _____
Range _____
Function? _____



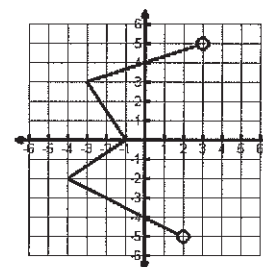
- 7) Domain _____
Range _____
Function? _____



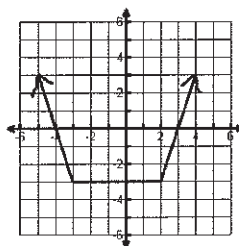
- 8) Domain _____
Range _____
Function? _____



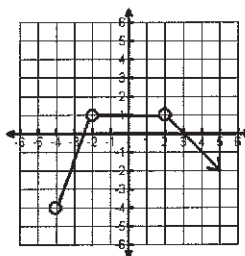
- 9) Domain _____
Range _____
Function? _____



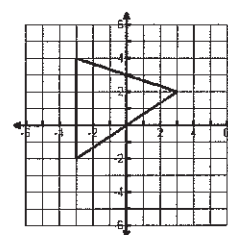
- 10) Domain _____
Range _____
Function? _____



- 11) Domain _____
Range _____
Function? _____



- 12) Domain _____
Range _____
Function? _____

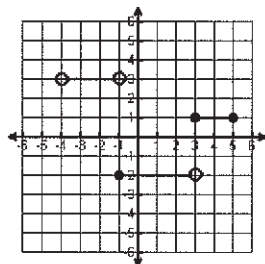


Domain and Range Worksheet #2

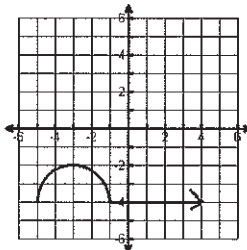
Name: _____

State the domain and range for each graph and then tell if the graph is a function (write yes or no).

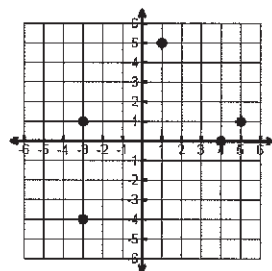
1) Domain _____
Range _____
Function? _____



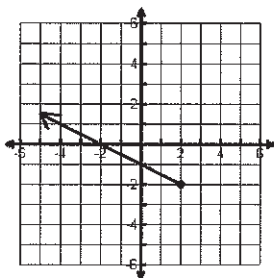
2) Domain _____
Range _____
Function? _____



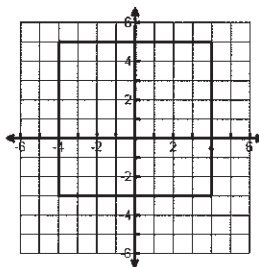
3) Domain _____
Range _____
Function? _____



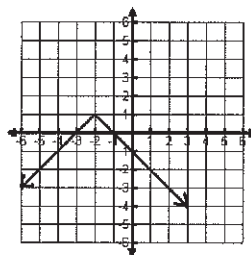
4) Domain _____
Range _____
Function? _____



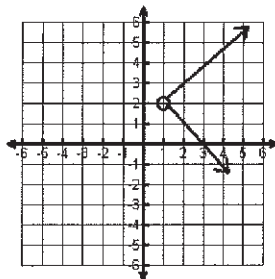
5) Domain _____
Range _____
Function? _____



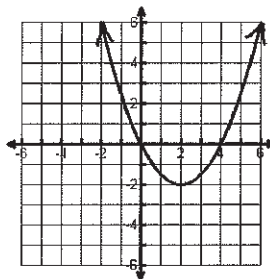
6) Domain _____
Range _____
Function? _____



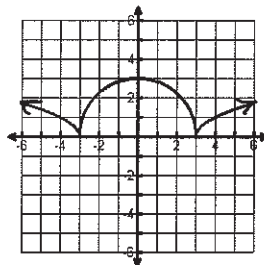
7) Domain _____
Range _____
Function? _____



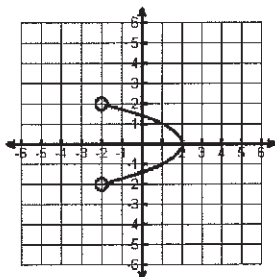
8) Domain _____
Range _____
Function? _____



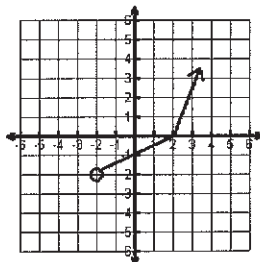
9) Domain _____
Range _____
Function? _____



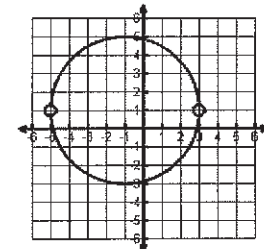
10) Domain _____
Range _____
Function? _____



11) Domain _____
Range _____
Function? _____



12) Domain _____
Range _____
Function? _____

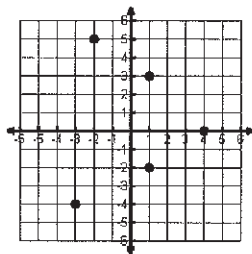


Domain and Range Notes

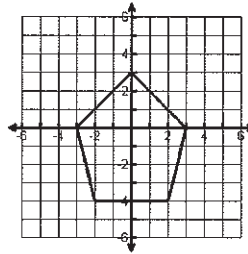
NAME: _____

State the domain and range for each graph and then tell if the graph is a function (write yes or no).

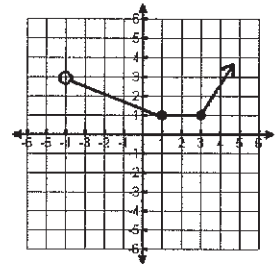
- 1) Domain _____
Range _____
Function? _____



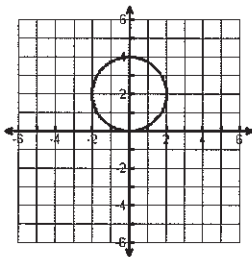
- 2) Domain _____
Range _____
Function? _____



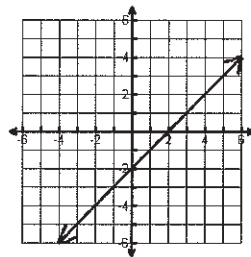
- 3) Domain _____
Range _____
Function? _____



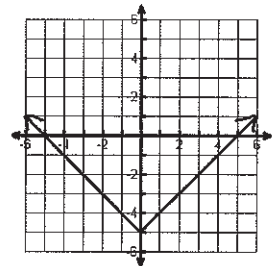
- 4) Domain _____
Range _____
Function? _____



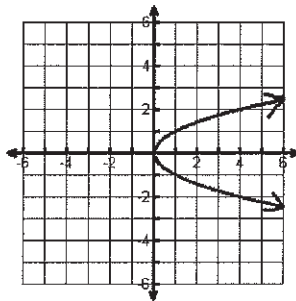
- 5) Domain _____
Range _____
Function? _____



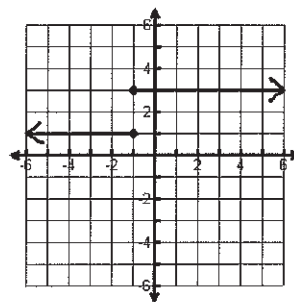
- 6) Domain _____
Range _____
Function? _____



- 7) Domain _____
Range _____
Function? _____



- 8) Domain _____
Range _____
Function? _____



- 9) Domain _____
Range _____
Function? _____

